

සියලුම හිමකම් ඇවිරිණි/  
முழுப் பதிப்புரிமையுடையது/  
All rights reserved

ශ්‍රී ලංකා නීති විද්‍යාලය/இலங்கைச் சட்டக்கல்லூரி /Sri Lanka Law College  
Sri Lanka Law College General Entrance Examination – 2022 November  
(02) –General Knowledge and Intelligence

Three hours

Part I - General Knowledge

Instructions to candidates

Write your Index Number here

Checked as correct

Invigilator's Initials

**Important:**

- \* Subject No. (02) General Knowledge and Intelligence paper consists of two parts as Part I-General Knowledge and part II - Intelligence.
- \* The time allowed for both parts is three hours.
- \* Part I - General Knowledge paper consists of 60 questions on 08 pages.
- \* Answer all the questions on this paper itself.
- \* Commence answering only after the Centre Supervisor's announcement.
- \* Instructions given should be strictly followed in answering this paper and marks will not be awarded for answers not in accordance with these instructions.
- \* Even if you are not attempting the paper hand it over to the supervisor.
- \*

Write the answers clearly and legibly in blue or black ink only and not in pencil

- \* It is an offence to remove this paper from the examination hall or taking photoshots of the same.
- \* Answer scripts with illegible figures, illegible handwriting and those where erasing fluid has been used will not be marked/evaluated

For Examiner's use only

Page No.	Question Nos	Marks Awarded
2	1-7	
3	8-15	
4	16-24	
5	25-31	
6	32-40	
7	41-52	
8	53-60	
Total		

Final Score

In figures	
In words	

Marking Examiner	
Checked By	



- Select the correct or the most suitable answer for the questions from 1 to 40 and write the **number** of the choice on the **dotted line** in front of each question.

- What is the main theme of the Earth Summit?
  - Conservation of the ozone layer
  - Man and the sustainable development
  - Sustainability of the physical environment
  - Protecting wildlife and forests
 (.....)
- What is the country by which 'X-Press Pearl ship' had been registered that caught fire near the Colombo harbor and affected the environment?
  - Germany
  - China
  - Singapore
  - Japan
 (.....)
- According to the World Happiness Report, what is the country in which the most happiness people live in the world?
  - Sweden
  - Norway
  - New Zealand
  - Finland
 (.....)
- According to the World Health Organization Report in 2019, which country did have the lowest pregnant death rate in the South Asia?
  - Sri Lanka
  - Nepal
  - Pakistan
  - India
 (.....)
- According to the Right to Information policy in 2016, within how many days does it require to provide an information requested by a citizen?
  - 7 days
  - 10 days
  - 14 days
  - 18 days
 (.....)
- What is the vaccine recommended by the most of the countries in the world to combat the covid-19 virus?
  - Astra Zenica
  - Pfizer
  - Sino Pharm
  - Janssen
 (.....)
- According to the predictions by the United Nations Organization, in what country does it believe that would report the world highest population by the year 2023?
  - India
  - China
  - America
  - Russia
 (.....)



8. How many people from the world population have died so far from the COVID-19 outbreak as of October 2022 in millions?
- (1) 4.6 (2) 6.5  
(3) 8.2 (4) 9.7 (.....)
9. State the two countries respectively beaten by Sri Lanka when it won the Asian cricket cup and the Netball Championships in 2022 in the finals.
- (1) Pakistan and Japan  
(2) India and Maldives  
(3) Bangladesh and Singapore  
(4) Pakistan and Singapore (.....)
10. What state is scheduled to be hosted the 2022 FIFA World Cup?
- (1) Brazil (2) Argentina  
(3) Qatar (4) America (.....)
11. According to what mythology the symbol of Goddess of Law and order has been originated from?
- (1) Roman (2) Greek  
(3) Misaray (4) Persian (.....)
12. What is the law used to control the general public during natural disasters, struggles, or wars?
- (1) Civil Rights Law (2) Law of war  
(3) Marshal Law (4) State of Emergency Law (.....)
13. What is the incorrect statement related to Natural law?
- (1) Natural law is very close to the ethics.  
(2) Natural law is equal to man-made law.  
(3) Man- made law is invalid if it is opposite to the natural law.  
(4) Man -made law cannot violate the natural law. (.....)
14. In which statement of the Universal Declaration of Human Rights does confirm that the law is universal for all?
- (1) Second Statement (2) Fourth statement  
(3) Seventh statement (4) Eighth statement (.....)
15. Supreme Court of which country in June 2022 did issue its decision overturning “Roe vs. Wade”, upending 50 years of abortion rights?
- (1) America (2) United Kingdom  
(3) Iraq (4) Sweden (.....)



16. According to the law in Sri Lanka, what is the minimum age at which a court action could be taken against a person even if he or she is considered as able to commit a sexual offence?
- (1) 08 years (2) 12 years  
(3) 16 years (4) 18 years (.....)
17. Out of the given opinions related to the knowledge of the origin of the life, what is the most acceptable one?
- (1) Opinion of cosmogenesis (life came from the space)  
(2) Opinion of divine genesis (life is created by the god)  
(3) Opinion of spontaneous generation  
(4) Opinion of evolution(biochemically) (.....)
18. What is the theory developed by Albert Einstein?
- (1) Theory of Evolution (2) Theory of Relativity  
(3) Theory of Psycho-Analysis (4) Theory of Pragmatism (.....)
19. What is the main type of gas present in bio-fuels?
- (1) Ethane (2) Hexane  
(3) Halothane (4) Methane (.....)
20. What is the metal used to create the Statue of Liberty, the symbol of Law and Peace in America?
- (1) Silver (2) Lead  
(3) Copper (4) Iron (.....)
21. By whom the democracy has been explained as a 'government of the people, by the people, for the people'?
- (1) Abram Lincoln (2) Aristotle  
(3) Nelson Mandela (4) Niccolo Machiavelli (.....)
22. Upto which year the Elizabeth II Queen of the United Kingdom had been considered as the leader in Sri Lanka?
- (1) 1931 (2) 1948  
(3) 1972 (4) 2022 (.....)
23. What is the incorrect statement related to the president of India, Droupadi Murmu?
- (1) The fifteenth president of India.  
(2) The first president belonging to a tribal community.  
(3) A teacher from the State of Eastern Orissa.  
(4) The first lady president of India. (.....)
24. What is the island belonging to Sri Lanka which Tamil Nadu has requested from the state of India to reclaim?
- (1) Delft (2) Kachchatheevu  
(3) Iranatheevu (4) Nainatheevu (.....)



25. What are the three states who presided to make the suggestion of establishing a universal organization for world peace?
- (1) Britain, France, Germany
  - (2) United States of America, Britain, Soviet Russia
  - (3) Republic China, Soviet Russia, Japan
  - (4) Germany, United States of America, France (.....)
26. According to the United Nations Convention on the Rights of the Child – an international agreement on childhood, under which age a person is interpreted as a child?
- (1) 12 years
  - (2) 14 years
  - (3) 16 years
  - (4) 18 years (.....)
27. Which amendment to the Constitution did power again those hold dual citizenship to contest elections?
- (1) 13<sup>th</sup> Amendment
  - (2) 17<sup>th</sup> Amendment
  - (3) 19<sup>th</sup> Amendment
  - (4) 20<sup>th</sup> Amendment (.....)
28. Out of the wind power plants given which one was opened in 2020 in Sri Lanka?
- (1) Pavandanavi
  - (2) Lak Vijaya
  - (3) Yugadanavi
  - (4) Thambapavani (.....)
29. The famous ancient Sri Lankan king who ruled with even justice toward both man and the animals is,
- (1) Ellara
  - (2) Dhathusena
  - (3) Mahasen
  - (4) Buddhadasa (.....)
30. What is the commission appointed by the British colonial office with the main aim of assessing the administration and judicial system of the island in Ceylon?
- (1) Herbetweiss Commission
  - (2) Morgan commission
  - (3) Colebrook commission
  - (4) Mackay commission (.....)
31. Which constitutional amendment did it abolish the Right Of Appeal To The Privy Council in Britain by a person who is considered as able to commit an offence in the court in Sri Lanka?
- (1) 1931 Donomor constitution
  - (2) 1947 Soul bury constitution
  - (3) 1972 constitution
  - (4) 1978 constitution (.....)



32. Which type of observation that has been mostly contributed to reveal most of the correct information of the suspects by the detective service?
- (1) Direct observation (2) Participatory observation  
(3) Indirect observation (4) Observation of goods (.....)
33. Under which constitutional reforms did it abolish powers and duties of village councils in resolving cases in Sri Lanka and grant the same power to the courts?
- (1) Colebrook reforms (2) Cameron reforms  
(3) Morgan reforms (4) Manning reforms (.....)
34. At which place is Sri Lanka in terms of malnutrition according to the assessment of the United Nations Children's Fund (UNICEF) as of August 2022?
- (1) Second place (2) Fourth place  
(3) Sixth place (4) Eighth place (.....)
35. Which country has declared digitalization as a fundamental human right?
- (1) Korea (2) France  
(3) Philippines (4) Finland (.....)
36. What date has been declared as the International Yoga Day which was also commemorated in Sri Lanka in 2022?
- (1) 22<sup>nd</sup> May (2) 21<sup>st</sup> June  
(3) 6<sup>th</sup> October (4) 10<sup>th</sup> December (.....)
37. In which State of India did it report a higher death toll due to a collapse of a bridge while celebrating Diwali in 2022?
- (1) Gujarat (2) Rajasthan  
(3) Chennai (4) Bihar (.....)
38. What is the company which purchased the app to diagnose covid developed by a Sri Lankan professor?
- (1) Sino Pharm (2) Janssen  
(3) Pfizer (4) Gamaleya (.....)
39. Attempt made by Ukraine in joining to an international organization is considered as one of main reason for Russia-Ukraine conflict. What is this organization?
- (1) NATO (2) OPEC  
(3) WARSAW (4) GATT (.....)
40. What is the name of the English governor who explained the 1815 treaty of Kandyan convention written in English to the local leaders in Sinhala?
- (1) John Doyle  
(2) Robert Brownrigg  
(3) Frederick North  
(4) Robert Wilmot- Horton (.....)



- Write the short answer for the questions from 41-60 on the given dotted line.

41. What is the name in brief used to introduce the convention in 1971 to conserve the internationally important wetlands?  
.....
42. What is the name of the tree which was initially supposed to be extinct from Sri Lanka, yet found to be conserved again when Central highway is being constructed?  
.....
43. What is the name of the tree which is used as the raw materials for the production of Palm oil?  
.....
44. What is the current population of Sri Lanka approximately in millions?  
.....
45. In which country did a higher number of people die due to stampede at a football stadium in 2022?  
.....
46. State the post introduced as a salient feature of 1978 Constitution of Sri Lanka to investigate human rights violation related complaints against an institution and seek resolutions to those complaints.  
.....
47. What is the name of the Chairman of the Presidential Task Force for "One Country, One Law"?  
.....
48. What is the year and the date in which the Universal Declaration of Human Rights was adopted by the General assembly of the United Nations?  
.....
49. Which country does Aeroflot flight belong to that was banned by the Sri Lankan court lifts from leaving Sri Lanka in 2022?  
.....
50. What are the two types of gases used in a domestic gas cylinder?  
.....
51. What is the name of the company that produced organic fertilizer which was banned on importing from China to Sri Lanka after detecting harmful bacteria?  
.....
52. Which anniversary did it celebrate marking Hong Kong's return to Chinese rule in 2022?  
.....



53. What is the name of the Chinese Research ship came to Sri Lanka in August 2022 that led to a diplomatic dispute between Sri Lanka and India?  
.....
54. Name the country and the city in which the International Court of Justice is located..  
.....
55. What is the maximum amount of US dollars granted for persons in, or resident in, Sri Lanka who hold foreign currency notes in possession as of 16<sup>th</sup> June 2022?  
.....
56. Name the author of the book "From Third World to First World" which is a memoir.  
.....
57. Name the author of the world-renowned novel of "War and Peace".  
.....
58. Name the Japan's long-serving Prime Minister who was shot dead by an assassinator.  
.....
59. To which level of the National Vocational Qualifications (NVQ) Framework does Advanced level qualification belong ?  
.....
60. According to the law in Sri Lanka under which age level the sale of alcohol is illegal?  
.....



සියලුම හිමිකම් ඇවිරිණි/  
முழுப் பதிப்புரிமையுடையது/  
All rights reserved

ශ්‍රී ලංකා නීති විද්‍යාලය/இலங்கைச் சட்டக்கல்லூரி /Sri Lanka Law College  
Sri Lanka Law College General Entrance Examination – 2022 November  
(02) –General Knowledge and Intelligence

Part II - Intelligence

Instructions to candidates

Write your Index Number here

.....

Checked as correct

.....  
Invigilator's Initials

**Important:**

- \* Subject No. (02) General Knowledge and Intelligence paper consists of two parts as Part I-General Knowledge and part II - Intelligence.
- \* The time allowed for both parts is three hours.
- \* Part II - Intelligent paper consists of 60 questions on 11 pages.
- \* Answer all the questions on this paper itself.
- \* Commence answering only after the Centre Supervisor's announcement.
- \* Instructions given should be strictly followed in answering this paper and marks will not be awarded for answers not in accordance with these instructions.
- \* Even if you are not attempting the paper hand it over to the supervisor.
- \* Write the answers clearly and legibly in **blue or black ink only and not in pencil**
- \* It is an offence to remove this paper from the examination hall or taking photoshots of the same.
- \* Answer scripts with illegible figures, illegible handwriting and those where erasing fluid has been used will not be marked/evaluated

For Examiner's use only

Page No.	Question Nos	Marks Awarded
2	1-10	
3	11-16	
4	17-20	
5	21-23	
6	24-26	
7	27-30	
8	31-35	
9	36-40	
10	41-51	
11	52-60	
Total		

Final Score

In figures	
In words	

Marking Examiner	
Checked By	



- Under each question from No 1 to 5, there is a relationship between the given first two words, select the suitable word from the given four words to fill in the blank to get the same relationship between the second two words, and write its **number on the dotted line** given against the question.

- Crime: Court :: disease : .....  
(1) Hospital      (2) Cemetery      (3) Pharmacy      (4) Laboratory      (.....)
- Rain: Water :: Competition : .....  
(1) Victory      (2) Cup      (3) Result      (4) Happiness      (.....)
- Police : Complainants :: Bank : .....  
(1) Bank Officers      (2) Depositors      (3) Customers      (4) The guards      (.....)
- Rainbow: Colours :: Book : .....  
(1) Letters      (2) Numbers      (3) Figures      (4) Pages      (.....)
- Rupee : Dollar :: metre : .....  
(1) Kilometer      (2) Centimeter      (3) Inch      (4) Litre      (.....)

- Under each question from No. 6 to 10, five words are given, of them four words can be included into one group according to their meaning, select the word that cannot be included in to the group and write its **number on the dotted line** given against the question.

- (1) Trousers      (2) Umbrella      (3) Wrist watch      (4) Rain court      (5) Hat  
(.....)
- (1) Cry      (2) Scold      (3) Stare      (4) Laugh      (5) Satisfy  
(.....)
- (1) School      (2) Temple      (3) Kovil      (4) Court      (5) Prison  
(.....)
- (1) Election      (2) Voter      (3) Representation      (4) Vote      (5) Ruling  
(.....)
- (1) Driver      (2) Teacher      (3) Procter      (4) Carpenter      (5) Doctor  
(.....)

- Under each question from No. 11 to 15, two statements are given. They may appear as not true but for the purpose of answering the questions consider them as true. With the two statements, two conclusions that can be made on them are also given. Take one decision from the following decisions about the correctness of the two conclusions and write its **number on the dotted line** against the question.

- A - Only conclusion one is correct.
- B - Only conclusion two is correct.
- C - Only conclusion one or only conclusion two is correct.
- D - Both conclusions are wrong.
- E - Both conclusions are correct.



11. Statements: 1. Some clothes are trousers.  
2. Some trousers are imported materials.  
Conclusions: 1. Some clothes are imported materials.  
2. Some imported materials are clothes.  
Decision about the correctness of the conclusions.  
(1) A (2) B (3) D (4) E (.....)




12. Statements: 1. Some rose flowers are red flowers.  
2. Yellow flowers are not rose flowers.  
Conclusions: 1. Some red flowers are yellow flowers.  
2. All yellow flowers are red flowers.  
Decision about the correctness of the conclusions.  
(1) A (2) B (3) C (4) D (.....)



13. Statements: 1. All drivers are males.  
2. Some males are educated people.  
Conclusions: 1. Some drivers are educated people.  
2. Some educated people are males.  
Decision about the correctness of the conclusions.  
(1) A (2) B (3) D (4) E (.....)



14. Statements: 1. Some pens are pencils.  
2. All pencils are local products.  
Conclusions: 1. All pens are local products.  
2. All pencils are pens.  
Decision about the correctness of the conclusions.  
(1) A (2) B (3) D (4) E (.....)



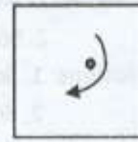
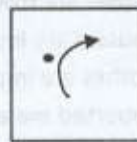
15. Statements: 1. All pineapples are mangoes.  
2. All oranges are mangoes.  
Conclusions: 1. Some oranges are pineapples.  
2. No oranges are pineapples.  
Decision about the correctness of the conclusions.  
(1) A (2) B (3) C (4) D (.....)

• Under each question from No. 16 to 20, five figures are given. Among them one figure is different in certain features from the others. Select that mismatched figure and write its **number** on the **dotted line** given against the question.

16.   
(1) (2) (3) (4) (5) (.....)

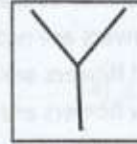

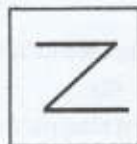


17.



(.....)

18.



(1)

(2)


(3)

(4)

(5)

(.....)

19.



(1)

(2)

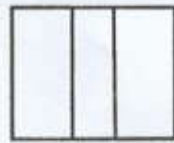
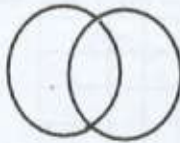
(3)

(4)

(5)

(.....)

20.



(1)

(2)

(3)

(4)

(5)

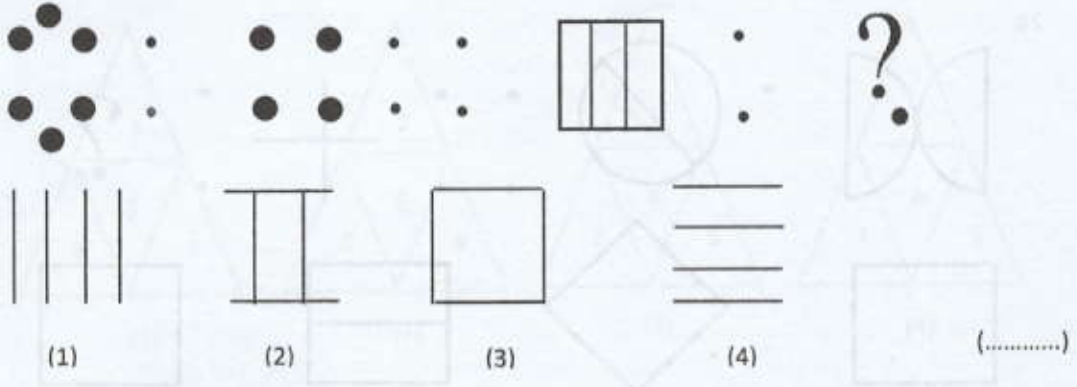
(.....)

- Under each question from No. 21 to 25, one pair of figures and only one figure of another pair of figures are given. Select the most suitable figure to put in the place indicated by "?" to make the same relationship between the second pair of figures as in the first pair of figures, and write its number on the dotted line given against the question.

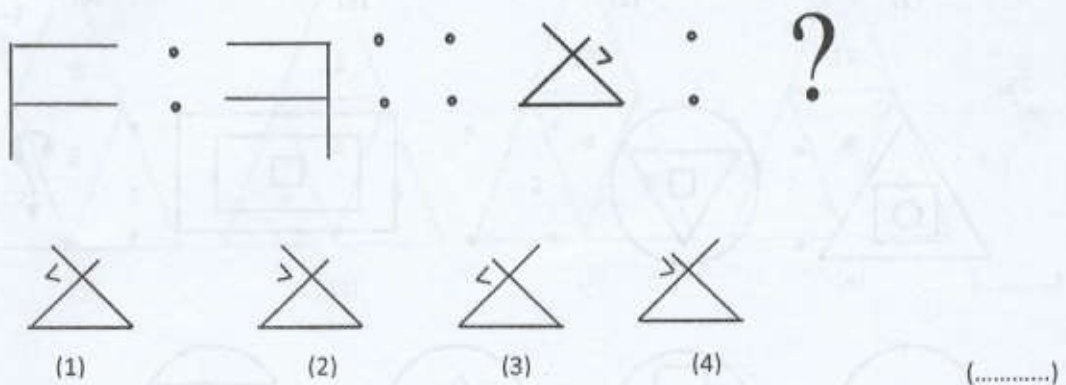




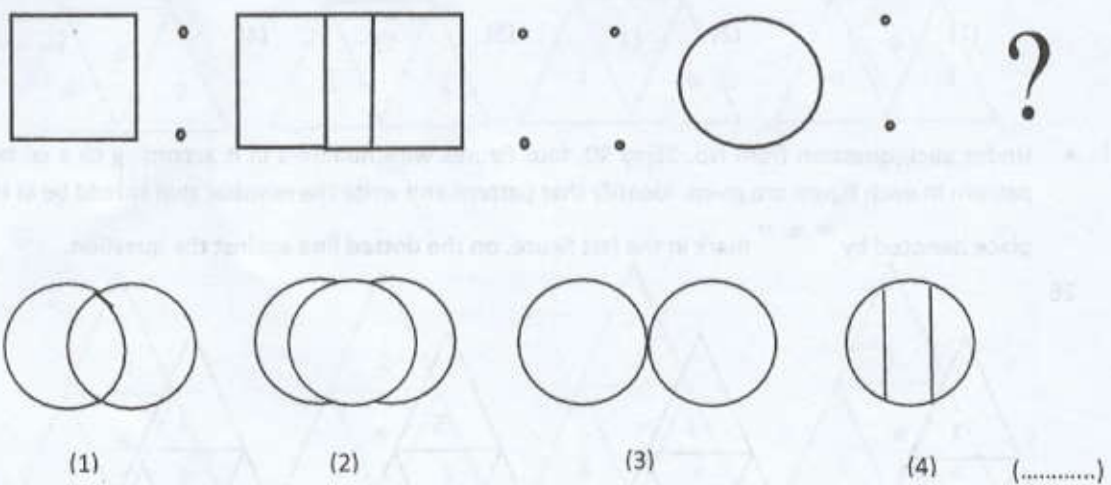
21.



22.

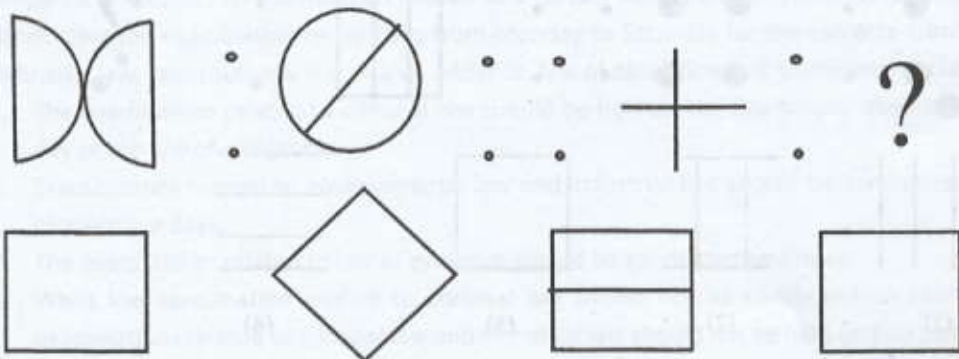


23.





24.



(1)

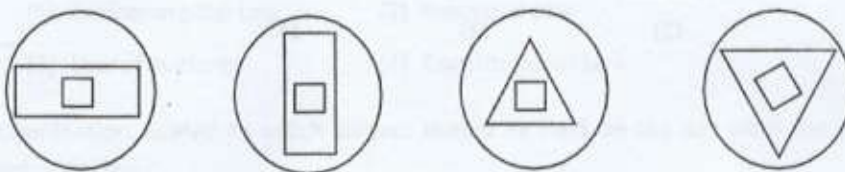
(2)

(3)

(4)

(.....)

25.



(1)

(2)

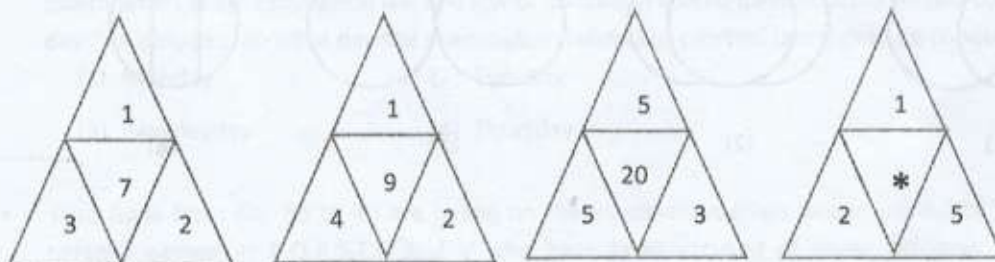
(3)

(4)

(.....)

- Under each question from No. 26 to 30, four figures with numbers in it according to a certain pattern in each figure are given. Identify that pattern and write the **number** that should be in the place denoted by “ \* ” mark in the last figure, **on the dotted line** against the question.

26.



(1)

(2)

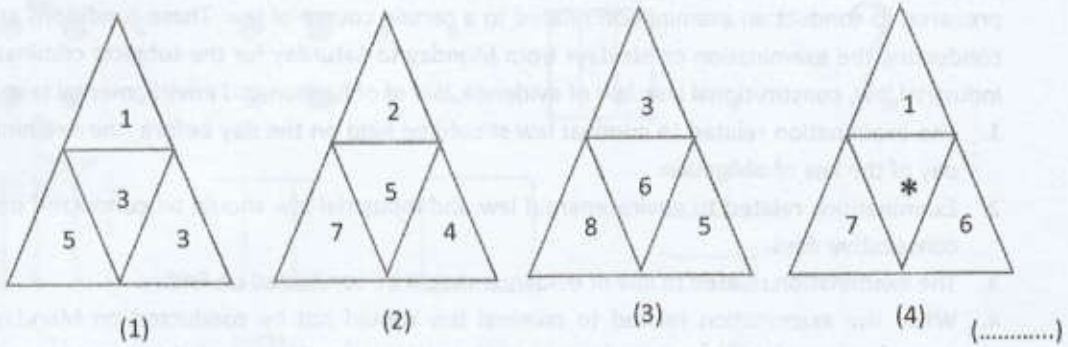
(3)

(4)

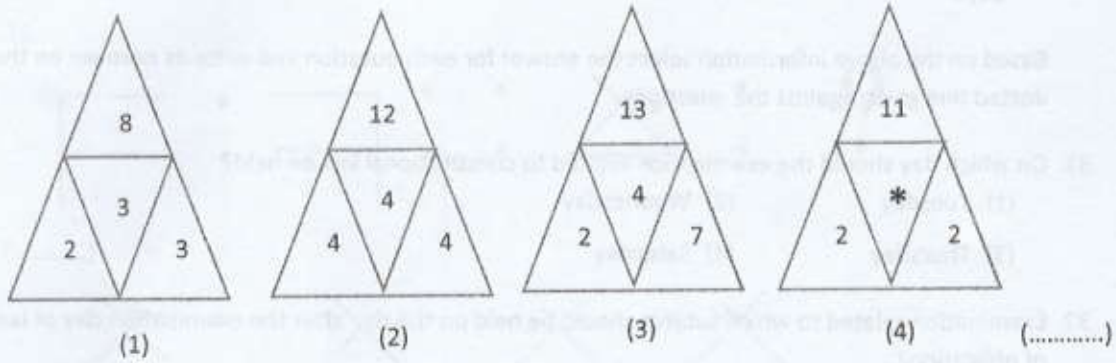
(.....)



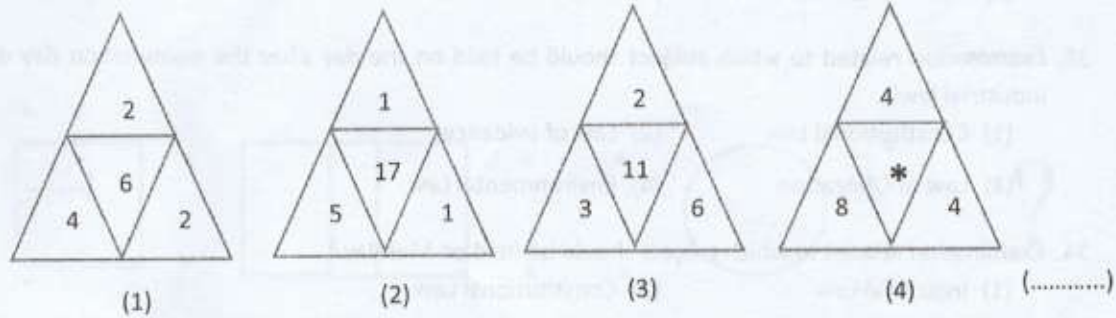
27.



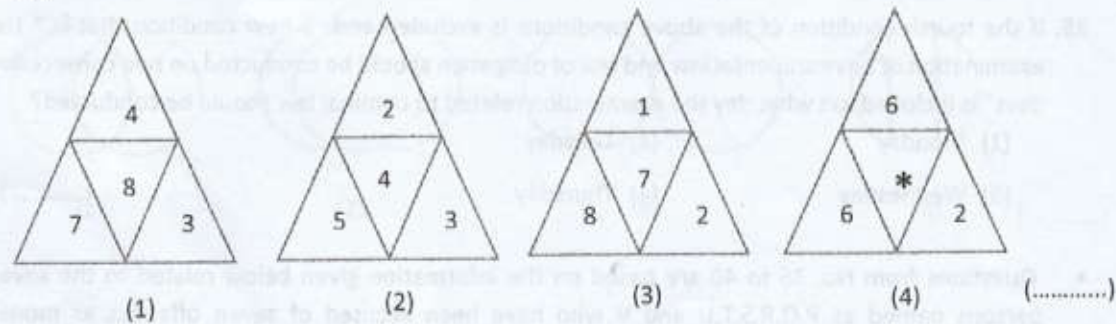
28.



29.



30.



- Questions from No. 31 to 35 are based on the four conditions under which a plan should be prepared to conduct an examination related to a certain course of law. These conditions are for conducting the examination on six days from Monday to Saturday for the subjects criminal law, industrial law, constitutional law, law of evidence, law of obligation and environmental law.

1. The examination related to criminal law should be held on the day before the examination day of the law of obligation.
2. Examinations related to environmental law and industrial law should be conducted on two consecutive days.
3. The examination related to law of evidence should be conducted on Friday.
4. While the examination related to criminal law should not be conducted on Monday the examinations related to criminal law and industrial law should not be held on two consecutive days.

Based on the above information select the answer for each question and write its **number on the dotted line** given against the questions.

31. On which day should the examination related to constitutional law be held?  
(1) Tuesday                      (2) Wednesday  
(3) Thursday                      (4) Saturday                      (.....)
32. Examination related to which subject should be held on the day after the examination day of law of obligation?  
(1) Environmental Law              (2) Industrial Law  
(3) Law of evidence              (4) Constitutional Law              (.....)
33. Examination related to which subject should be held on the day after the examination day of industrial law?  
(1) Constitutional Law              (2) Law of evidence  
(3) Law of Obligation              (4) Environmental Law              (.....)
34. Examination related to which subject should be held on Monday?  
(1) Industrial Law              (2) Constitutional Law  
(3) Law of Obligation              (4) Environmental Law              (.....)
35. If the fourth condition of the above conditions is excluded and a new condition that is "the examination of environmental law and law of obligation should be conducted on two consecutive days" is included, on what day the examination related to criminal law should be conducted?  
(1) Monday                      (2) Tuesday  
(3) Wednesday                      (4) Thursday                      (.....)

- Questions from No. 36 to 40 are based on the information given below related to the seven persons named as P,Q,R,S,T,U and V who have been accused of seven offences as money laundering, drugs transportation, murder, vehicle theft, assault, public property abusing and extortion.



- ❖ One person has been accused of one offence.
- ❖ Among them two are brothers, two are sisters and remaining two are son and father.
- ❖ There is no person from U's family other than U.
- ❖ V has no brothers or sisters.
- ❖ R is T's elder brother and he has been accused of assault.
- ❖ Elder sister of the person who has been accused of the murder is P who has been accused of the vehicle theft.
- ❖ Q has been accused of money laundering.
- ❖ U has not been accused of extortion or drug transportation.

According to these information select the correct answer to the following questions and write its number on the dotted line given against the question.

36. Who are the two persons definitely belonging to the same family?  
(1) Q and T                      (2) P and T                      (3) P and S                      (4) Q and R                      (.....)
37. Who has been accused of public property abusing?  
(1) S                                  (2) T                                  (3) U                                  (4) V                                  (.....)
38. Who have been accused of extortion?  
(1) Definitely T or V                      (2) Definitely not T or V  
(3) Definitely T or S                      (4) Definitely not T or S                      (.....)
39. What is S accused for?  
(1) Public property abusing                      (2) Murder  
(3) Extortion                                  (4) Drug transportation                      (.....)
40. Who is one of the two brothers?  
(1) P                                  (2) Q                                  (3) S                                  (4) T                                  (.....)

- Questions from No. 41 to 45 are based on the information related to the plots of land situated in the areas of A,B,C,D,E and owned by five person Dias, Silva, Mahipala, Senadeera and Lionel.
  - ❖ One person has only one plot from one area.
  - ❖ One person owns plots in all five areas. Two people own plots in four areas while other two people own plots in three areas.
  - ❖ Dias owns plots in all the areas where Mahipala owns plots.
  - ❖ Senadeera owns plots in all the areas where Dias owns plots.
  - ❖ Mahipala and Lionel own same number of plots.
  - ❖ Silva owns less number of plots than Senadeera owns.
  - ❖ Dias, Lionel and one other person own no plots in the C area.
  - ❖ Three persons including Mahipala own no lands in the E area.

According to these information select the correct answer to the following questions and write its **number on the dotted line** against the question.

41. How many plots does Silva own?  
(1) 3 (2) 4  
(3) 5 (4) Cannot be determined (.....)
42. Who owns the highest number of plots?  
(1) Mahipala (2) Lionel  
(3) Dias (4) Senadeera (.....)
43. Where doesn't Silva own plots?  
(1) B (2) C (3) D (4) E (.....)
44. Where doesn't Mahipala own plots?  
(1) A (2) B (3) C (4) D (.....)
45. Where doesn't Lionel own plots?  
(1) A (2) B (3) D (4) E (.....)

- Find the correct answer to each question from No. 46 to 55 and write it **on the dotted line** against the question.

46. When Suranga was born, his mother was 30 years old and his sister, Sachini was 4 years old. When Sachini was born her father was 29 years old. What is the difference between the ages of Surangas' father and mother?  
(.....)

47. In a number of four digits second digit is three times of the fourth digit. First digit is four times of the third digit. Fourth digit is three times of the third digit. What is the third digit?  
(.....)

48. How many different squares can be created from the following figure?



49. All faces of a cube shaped 4 inch length piece of wood has been coloured in one colour. It has been cut into 1 inch length small cubes. Among them, how many pieces are coloured only two sides?  
(.....)

50. If one more student has been included to the certain group of students, the group could have been divided into small groups with three students or five students. If five more students were there in the group, the group could have been divided into small groups with seven students. What is the minimum number of students that could be there in the group of students?  
(.....)

51. The difference between two numbers is 20% of the larger number. If the smaller number is 20, what is the larger number?  
(.....)



52. Toffees contained in a bag were divided among A,B and C according to the rate of 2:5:3. B received 12 more toffees than what C received. What is the number A received?

(.....)

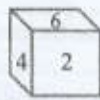
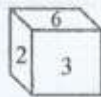
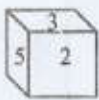
53. The price of a pencil and a pen is Rs.80. The price of a pencil and a book is Rs.180. The price of a pen and a book is Rs.200. What is the price of a book?

(.....)

54. The amount of pencils that a child has can be divided among three persons equally. But it can't be divided among six persons equally. If it is to be divided among five persons equally three more pencils are needed. What is the minimum number of pencils that the child has?

(.....)

55. Three positions of a dice of which each side has been marked with numbers 1,2,3,4,5 and 6 are shown below.



What is the number of the opposite side of the side marked with 1?

(.....)

- From question No 56 to 60 a series of letters which has a pattern has been given with some blanks. Find the set of letters that should be in the blanks in the correct order.

56. a \_ ba \_ b \_ b \_ a \_ b

- (1). abaab    (2). abbab    (3). aabba    (4). bbabb    (.....)

57. ba \_ cb \_ b \_ bab \_

- (1). acbb    (2). bacc    (3). bcaa    (4). cabb    (.....)

58. bca \_ b \_ aabc \_ a \_ caa

- (1). acab    (2). bcbb    (3). cbab    (4). ccab    (.....)

59. \_ a \_ b \_ abaa \_ bab \_ abba

- (1). aaabb    (2). ababb    (3). babab    (4). babba    (.....)

60. \_ bc \_ ca \_ aba \_ c \_ ca

- (1). abcbb    (2). bbbcc    (3). bacba    (4). abbcc    (.....)